

ADDITION

Add up the number of fruits and write your answer in the empty box below. Fill in the blank spaces to complete the name of the fruit.


Name:

Grade & Section:


Age

Date:


FRUITS




+




=



WA _ ERM _ LO _




+




=




STR _ WB _ R _ Y




+




=



OR _ NGE



+



=



AP _ LE

SUBTRACTION

Subtract the number of animals and write your answer in the empty box below. Fill in the blank spaces to complete the name of the animal.


Name:

Grade & Section:


Age

Date:


ANIMALS




-




=



BUTT_R F Y




-




=




MO_K Y




-




=




TO_TO_SE



-



=



F_S

ADDITION

Add up the number of balls and write your answer in the empty box below. Fill in the blank spaces to complete the name of the ball.


Name:

Grade & Section:

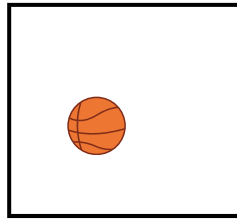
Age

Date:


BALL




+




=




BASKET_A_L




+




=




FOOT_A_L




+




=




B_LL



+



=



TE_N_S BA_L

ADDITION

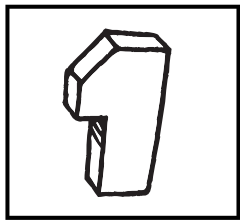
Name:

Grade & Section:

Age


Date:

Write your answer in the box below!




ONE


+



THREE


=






FIVE


+



TWO

=






FOUR


+



SIX


=






SEVEN

+



EIGHT

=



SUBTRACTION


Name:

Grade & Section:

Age


Date:

Write your answer in the box below!




FIVE

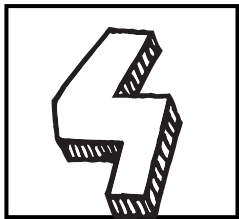
-



TWO


=





FOUR

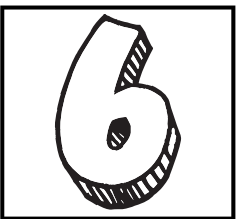
-



THREE


=





SIX


-



THREE


=






SEVEN

-



ONE

=



ADDITION

Add up the number of flowers and write your answer in the empty box below. Fill in the blank spaces to complete the name of the flower


Name:

Grade & Section:


Age

Date:


FLOWERS



+



=




SU_FLO_W_R



+




=




R_SE



+



=




DA_SI_S



+



=



HIB_S_US

SUBTRACTION

Subtract the number of insects and write your answer in the empty box below. Fill in the blank spaces to complete the name of the insect


Name:

Grade & Section:


Age

Date:


INSECTS




-




=




B _ _ S



-




=




A _ T




-




=




B _ ETL _



-



=



GR _ SSHO _ P _ R

ADDITION

Add up the number of furniture and write your answer in the empty box below. Fill in the blank spaces to complete the name of the furniture


Name:

Grade & Section:


Age

Date:


FURNITURE




+




=




CH_I_



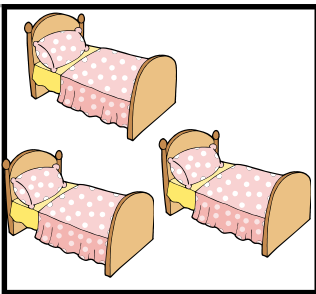
+



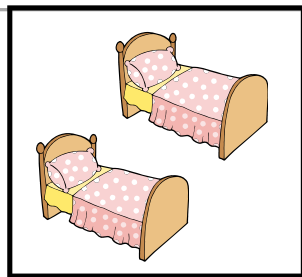
=




TA_LE



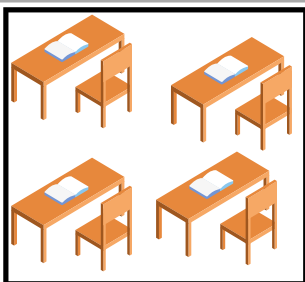
+



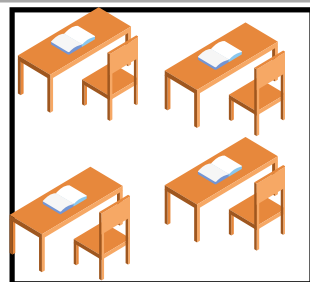
=




B_D



+



=



DE_K

SUBTRACTION

Subtract the number of clothing and write your answer in the empty box below. Fill in the blank spaces to complete the name of the clothing

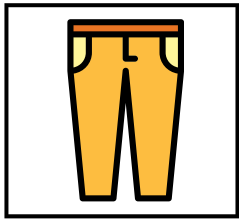
Name:

Grade & Section:


Age

Date:


CLOTHING




-



=




TR_US_R




-




=




SH_ES



-



=




SK_R_



-



=



SH_RT
